

DEPARTMENT OF MATHEMATICS


GRADE 3

TERM-1, ACADEMIC YEAR 2018 – 19

Topic		Multiplication			
Grade	3	Section	A-N	Date	November 2018
Student Name					

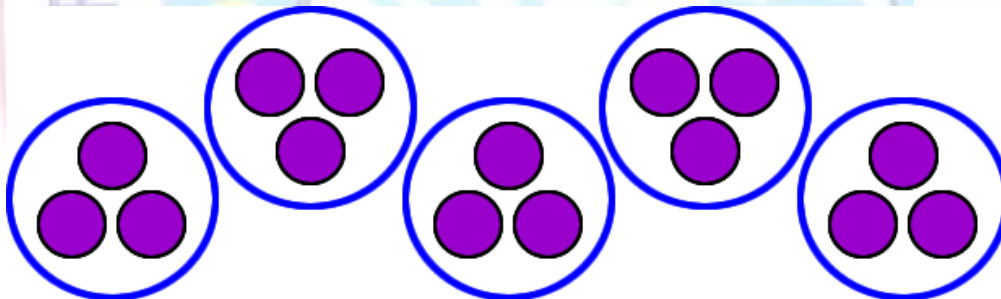
Q1. Write the missing numbers.

a)



$$2 \times 8 =$$

b)




$$5 \times 3 =$$

c)




$$=$$



Q2. Multiply.

a) $0 \times 9 =$	b) $9 \times 6 =$
c) $2 \times 8 =$	d) $4 \times 10 =$
e) $5 \times 5 =$	f) $3 \times 7 =$
g) $6 \times 4 =$	h) $15 \times 10 =$
i) $66 \times 10 =$	j) $6 \times 8 =$



Q3. Find the product.

a)

$$\begin{array}{r} 13 \\ \times 3 \\ \hline \square \\ + \square \\ \hline \square \end{array}$$

b)

$$\begin{array}{r} 14 \\ \times 5 \\ \hline \square \\ + \square \\ \hline \square \end{array}$$

c)

$$\begin{array}{r} 19 \\ \times 5 \\ \hline \square \\ + \square \\ \hline \square \end{array}$$

d)

$$\begin{array}{r} 18 \\ \times 3 \\ \hline \square \\ + \square \\ \hline \square \end{array}$$