

DEPARTMENT OF MATHEMATICS


GRADE 3

TERM-1, ACADEMIC YEAR 2018 – 19

Topic		Multiplication			
Grade	3	Section	A-N	Date	November 2018
Student Name					

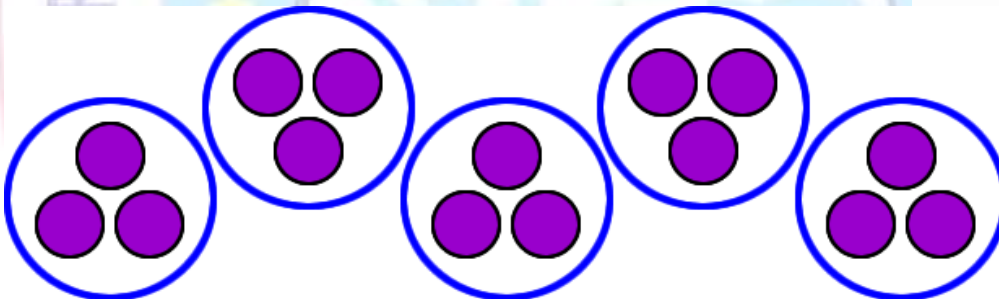
Q1. Write the missing numbers.

a)



$$2 \times 8 = 16$$

b)



$$5 \times 3 = 15$$


c)



$$3 \times 4 = 12$$

Q2. Multiply.

a) $0 \times 9 = 9$	b) $9 \times 6 = 54$
c) $2 \times 8 = 16$	d) $4 \times 10 = 40$
e) $5 \times 5 = 25$	f) $3 \times 7 = 21$
g) $6 \times 4 = 24$	h) $15 \times 10 = 150$
i) $66 \times 10 = 660$	j) $6 \times 8 = 48$



Q3. Find the product.

a)

$$\begin{array}{r} 13 \\ \times 3 \\ \hline \end{array}$$

$\boxed{9}$ ← $3 \times 3 = 9$
 $\boxed{30}$ ← $10 \times 3 = 30$
 $\boxed{39}$ ← $9 + 30 = 39$

b)

$$\begin{array}{r} 14 \\ \times 5 \\ \hline \end{array}$$

$\boxed{20}$
 $\boxed{50}$
 $\boxed{70}$

c)

$$\begin{array}{r} 19 \\ \times 5 \\ \hline \end{array}$$

$\boxed{45}$ ← $9 \times 5 = 45$
 $\boxed{50}$ ← $10 \times 5 = 50$
 $\boxed{95}$ ← $45 + 50 = 95$

d)

$$\begin{array}{r} 18 \\ \times 3 \\ \hline \end{array}$$

$\boxed{24}$
 $\boxed{30}$
 $\boxed{54}$