









DEPARTMENT OF MATHEMATICS

GRADE 1

TERM-1, ACADEMIC YEAR 2018- 19

Topic		ADDITION		
Grade	1	Section		Date
Student Name				

Add the Numbers

$\begin{array}{r} 5 \\ + 2 \\ \hline \end{array}$ 	$\begin{array}{r} 4 \\ + 3 \\ \hline \end{array}$ <p>Four teeth on top and three on the bottom equal seven teeth in all.</p>  <p>Can you draw teeth on the shark?</p>
$\begin{array}{r} 4 \\ + 4 \\ \hline \end{array}$ 	$\begin{array}{r} 5 \\ + 3 \\ \hline \end{array}$ 
$\begin{array}{r} 6 \\ + 3 \\ \hline \end{array}$ 	$\begin{array}{r} 5 \\ + 4 \\ \hline \end{array}$ 
$\begin{array}{r} 3 \\ + 3 \\ \hline \end{array}$ 	$\begin{array}{r} 5 \\ + 5 \\ \hline \end{array}$ 



Add the Numbers

$$\square + \square = \square$$

$$\square + \square = \square$$

$$\square + \square = \square$$

$$\square + \square = \square$$

$$\square + \square = \square$$

$$\square + \square = \square$$