

DEPARTMENT OF MATHEMATICS

GRADES 4 TO 12

TERM-1, ACADEMIC YEAR 2017 – 18

Worksheet No. 2		Topic NETS			
Grade	6	Section		Date	15-11-17
Student Name					

Which figure represents the net for the triangular prism shown?

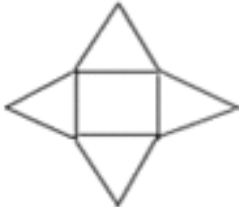
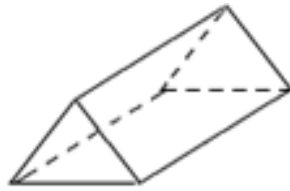


Figure 1

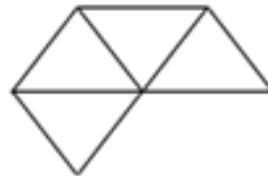


Figure 2

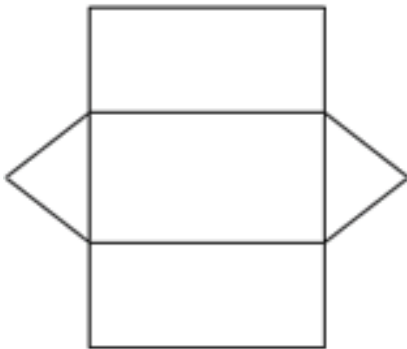


Figure 3

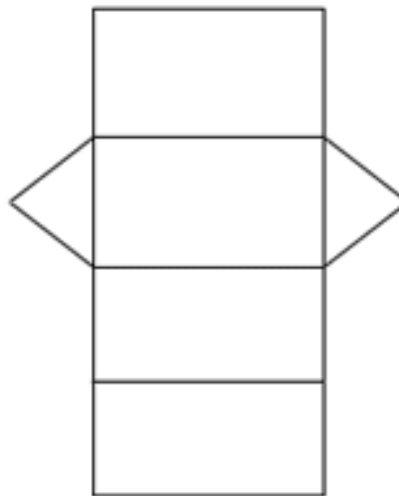
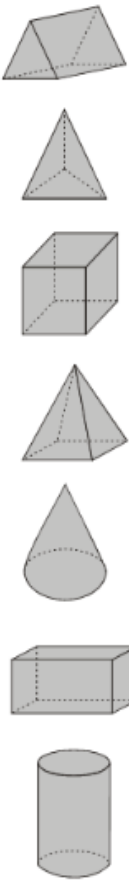


Figure 4

- Figure 3
- Figure 2
- Figure 1
- Figure 4



Identify nets of 3D shapes.



Name of shape	What shapes are the faces?	Which net?
Triangular prism	2 triangles, 3 rectangles	C

A

B

C

D

E

F

G