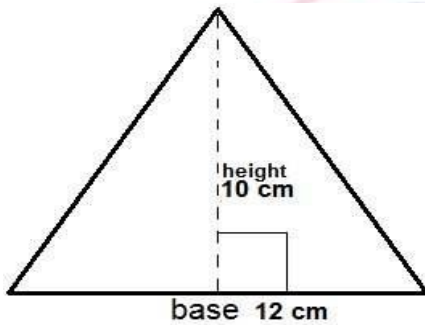


DEPARTMENT OF MATHEMATICS**GRADES 4 TO 12****TERM-1, ACADEMIC YEAR 2017 – 18**

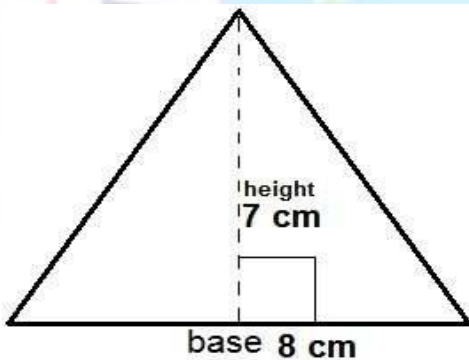
Worksheet No. 1		Topic Area of a triangle		
Grade	5	Section		Date
Student Name				

Q1)



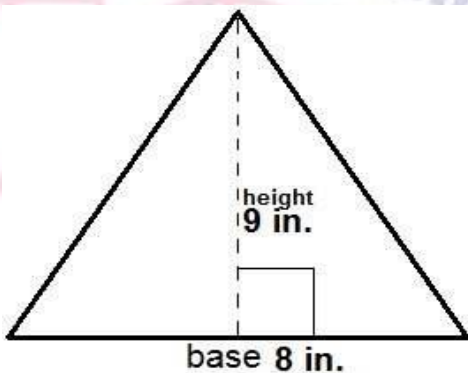
$$\text{Area} = \underline{\quad} \times \underline{\quad} \times \underline{\quad}$$

Q2)



$$\text{Area} = \underline{\quad} \times \underline{\quad} \times \underline{\quad}$$

Q3)



$$\text{Area} = \underline{\quad} \times \underline{\quad} \times \underline{\quad}$$